

Hello Year 3

How are you all?

How did you find telling the time to 5 minute intervals?

Today we are going to look at the same times as last week, but introduce what they look like on a digital clock.

Jun 19-16:01

1. Big hand (Past or to)?

2. Small hand (Which hour)?

3. Big hand (count the minutes)

3. Minutes

ten

1. Past or to

past

2. Which hour?

eight

Hour (Small hand)

Always 'past' in digital

Minutes (big hand)

Count 'past' from the 'o' clock position

11 12 1

10 9 8 7 6 5 4 3 2

10

8

3

:

Jun 19-16:04



- 1. Big hand (Past or to)?
- 2. Small hand (Which hour)?
- 3. Big hand (count the minutes)

3. Minutes	1. Past or to	2. Which hour?

Hour (Small hand)
Always 'past' in digital

:

Minutes (big hand)
Count 'past' from
the 'o' clock position

Jun 19-16:04



- 1. Big hand (Past or to)?
- 2. Small hand (Which hour)?
- 3. Big hand (count the minutes)

3. Minutes	1. Past or to	2. Which hour?

Hour (Small hand)
Always 'past' in digital

:

Minutes (big hand)
Count 'past' from
the 'o' clock position

Jun 19-16:04




- 1. Big hand (Past or to)?
- 2. Small hand (Which hour)?
- 3. Big hand (count the minutes)

3. Minutes	1. Past or to	2. Which hour?

Hour (Small hand)

Always 'past' in digital



Minutes (big hand)

Count 'past' from the 'o' clock position

Jun 19-16:04




- 1. Big hand (Past or to)?
- 2. Small hand (Which hour)?
- 3. Big hand (count the minutes)

3. Minutes	1. Past or to	2. Which hour?

Hour (Small hand)

Always 'past' in digital



Minutes (big hand)

Count 'past' from the 'o' clock position

Jun 19-16:04




- 1. Big hand (Past or to)?
- 2. Small hand (Which hour)?
- 3. Big hand (count the minutes)

3. Minutes	1. Past or to	2. Which hour?

Hour (Small hand)

Always 'past' in digital



Minutes (big hand)

Count 'past' from the 'o' clock position

Jun 19-16:04



Jun 19-16:25

Write the digital times to match



Match up the times that are the same



6:45

11:05

11:20

3:40

2:25