




Lara has 12 marbles. She gives one quarter to her sister. How many will they each have?



The whole is _____.

A quarter of _____ is _____.



Tyler has 16 cakes. He brings one quarter of them to school. How many did he bring?




The whole is _____.

A quarter of _____ is _____.



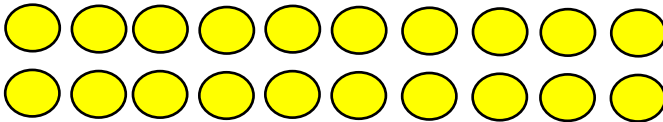
Wanda collects 8 eggs. She uses $\frac{1}{4}$ to make a cake. How many eggs did she use?



The whole is _____.


A quarter of _____ is _____.

Circle one quarter of the circles below.



The whole is _____.

One quarter of _____ is _____.



Circle $\frac{1}{4}$ of the sweets below.

The whole is _____.

One quarter of _____ is _____.

Calculate the answers. Show your working out in your book.

$$\frac{1}{4} \text{ of } 4 = \boxed{}$$

$$\frac{1}{4} \text{ of } 8 = \boxed{}$$

$$\frac{1}{4} \text{ of } 12 = \boxed{}$$

What have you noticed?